



ASIAN GRAMMAR SCHOOL

1st Term Assessment – 2018

Western Music

Grade 10

Marks	
Theory	
Practical	
Total	

Name

Class.....

3 Hours

Prepared by : Mrs. A.H.Rathnayake

Choose the most suitable answer.

- (01) A triplet is a group of three notes played in the time of?
- (1) One note (3) Two note
(2) Three notes (4) Two dotted note
- (02) What is the interval between C and F sharp ?
- (1) Major 3rd (3) Minor 3rd
(2) Augmented 3rd (4) Diminished 3rd
- (03) Which of the following has the notes of the lower tetra chord of C major?
- (1) B C[#] D[#] E (3) F[#] G[#] A[#] B
(2) G A B C (4) F G A B
- (04) In a Melodic minor scale interval between the Dominant and leading note is a₂
- (1) Major 7th (3) Augmented 7th
(2) Diminished 7th (4) Minor 7th
- (05) Which of the following is the relative major of C minor ?
- (1) B flat (3) E
(2) E flat (4) A^b
- (06) Which of the following is the leading note of F major ?
- (1) F[#] (3) E
(2) G (4) F
- (07) Which of the following is a whole bar rest in 4/4 time?
- (1) Brave (3) Dotted Minim
(2) Semibreve (4) Dotted Semibreve
- (08) Which of the following is unpleasant to the ear?
- (1) Bird song (3) Minor triad
(2) Major triad (4) Noise
- (09) Which of the Following indicates the measure the tempo ?
- (1) Metronome (3) Drum set
(2) Tuning folk (4) Timpani
- (10) Which of the following drums is played with both hands with using a stick?
- (1) Daula (3) Tammattama
(2) yak beraya (4) Side drum

- (11) Which of the following forms has 2 sections?
- (1) Sonata form (3) Ternary form
(2) Fugue (4) All of these
- (12) Which of the following key board was used in the Baroque period?
- (1) piano (3) Harpsichord
(2) Organ (4) Clavichord
- (13) Which of the following time signatures indicates four beats in a bar
- (1) 4 (2) 9 (3) 9 (4) All of these
4 2 16
- (14) Which of the following notes would be the tuning of the strings of the viola?
- (1) GDEA (3) CGDA
(2) EADG (4) All of these
- (15) Which of the following is different from others?
- (1) Violin (3) Cello
(2) Viola (4) Harp
- (16) Which of the following is a wood wind transposing instrument?
- (1) Oboe (3) Flute
(2) Trumpet (4) Tuba
- (17) Which of the following would not indicate any change of tone?
- (1) Crescendo (3) Calando
(2) Decrescendo (4) Tessitura
- (18) Which of the following would indicate loud?
- (1) Dolce (3) Fortissimo
(2) Dal segno (4) Tessitura
- (19) Which of the following is different from others?
- (1) Cello (3) Fugue
(2) Bassoon (4) Trumpet
- (20) Which of the following is a instrumental Composition?
- (1) Sonata (3) Fugue
(2) Symphony (4) Opera
- (21) Which of the Following bird has a non-singing tone?
- (1) Kingfisher (3) Magpie Robin
(2) My nah (4) Crow
- (22) How many symphonies did Mozart write ?
- (1) 104 (3) 9
(2) 21 (4) 108

(23) The time signature for a March is ?

- | | |
|----------------------|--------------------|
| (1) Simple quadruple | (3) Compound duple |
| (2) Simple triple | (4) Simple duple |

(24) The highest pitch instrument is ?

- | | |
|--------------|------------|
| (1) Piccolo | (3) Oboe |
| (2) Clarinet | (4) Violin |

(25) Which of the following is a Double reed instrument?

- | | |
|-------------|--------------------|
| (1) Oboe | (3) Double Bassoon |
| (2) Piccolo | (4) Cor Anglais |

(26) Which of the following has a key signature of 3 flats?

- | | |
|-------------|------------------|
| (1) E major | (3) A flat Major |
| (2) B major | (4) d Flat Major |
| (3) | |

(27) Which of the following is equivalent to the "Ni" in an Oriental notation?

- | | |
|---------|---------|
| (1) Me | (3) La |
| (2) Soh | (4) Fah |

(28) Which of the following time signature for compound duple with dotted beats,

- | | |
|---------|---------|
| (1) 2/2 | (3) 6/8 |
| (2) 3/4 | (4) 2/4 |

(29) Classical period is

- | | |
|---------------|---------------|
| (1) 1600-1750 | (3) 1750-1820 |
| (2) 1650-1750 | (4) 1500-1600 |

(30) Which one of these composers wrote Fur Elise?

- | | |
|--------------------|-----------------|
| (1) L.V. Beethoven | (3) W.A. Mozart |
| (2) J.S. Bach | (4) G.F. Handel |

(31) Which of the following is the main characteristic of sound?

- | | |
|--------------|------------------|
| (1) Pitch | (3) Quality |
| (2) Loudness | (4) all of these |

(32) Which of the following drum plays for Indian music?

- | | |
|--------------|----------------|
| (1) Udekkiya | (3) Getaberaya |
| (2) Thabla | (4) Yak Beraya |

(33) Number of quavers in a minim would be,

- | | |
|--------|--------|
| (1) 8 | (3) 32 |
| (2) 16 | (4) 4 |



(34) Which instrument has its string tuned to G D A E ?

- | | |
|------------|-----------------|
| (1) Violin | (3) Cello |
| (2) Viola | (4) Double bass |

(35) Which of the following is the meaning of Legato?

- | | |
|-------------------|-----------|
| (1) Play Smoothly | (3) Short |
|-------------------|-----------|

- (2) Singing style (4) Going at an easy pace
- (36) Which of the following is the Dominant in F minor?
- (1) B Flat minor (3) B Major
- (2) B Flat major (4) C Flat major
- (37) Which of the following notes has only one other enharmonic equivalent?
- (1) D Sharp (3) G Sharp
- (2) F Sharp (4) A sharp
- (38) Which of the following is the relative minor of G flat major?
- (1) B flat minor (3) A flat minor
- (2) E flat minor (4) G minor
- (39) Which of the following is the correct way of writing the G clef?



- (40) Which of the following contains the highest notes of a melody?
- (1) Violin (3) Soprano
- (2) Alto (4) Base

(Marks 1X40 =40)

Western Music

Grade 10


II Paper - 2018

• Answer Question No 1 and Four others.


(01) i (a) Write a Diatonic semitone below the given note.




(b) Write a semi tone above the given note



(ii) (a) write the Chromatic semitone above the given note



(b) Write the enharmonic equivalent of the given note



(iii) Explain the following

(a) Cantabile-

(b) Dolce-

(12 Marks)

(02) Write the following scale and mark semitone by slurs.

(a) Write in minims ascending and descending the major scale which has a key-signature of 5 Sharps. (Use the G clef)

(b) Using the G clef, write the relative minor scale of A in its Melodic form.

(c) Write B flat major scale in Minims. using F clef

(12Marks)

(03) (a) Give the opposite meaning of the given words.

- (i) Fortissimo-
- (ii) Dicressendo-
- (iii) Light music-
- (iv) Sonata-
- (v) Largo-

(b) Write a brief description about the Nurthi Gee.

(12 Marks)

(04) Write a short account of one of them.

- (i).Woodwind family
- (ii) Brass wind family
- (iii)Folk music
- (iv) Eastern music notes

(12 Marks)

(05) Write the following intervals

A musical staff with five measures. The first measure contains a bass clef and a note on the second line (F4). The second measure contains a note on the first space (C4) with a flat sign. The third measure contains a note on the second line (F4) with a sharp sign. The fourth measure contains a note on the first space (C4). The fifth measure contains a note on the second line (F4). Below the staff, the intervals are labeled: Major 6th, Perfect 5th, Minor 3rd, Minor 7th, and Aug 6th.

(06) Describe the following briefly.

Rondo form

Trumpet

Ternary form

(12 Marks)

(12 Marks)